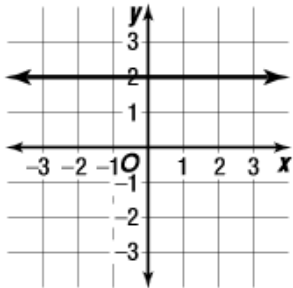


8.2 Domain and Range (Roster & Interval Notation)

Directions label what the domain and range is of the following using what you know about interval and roster notation.

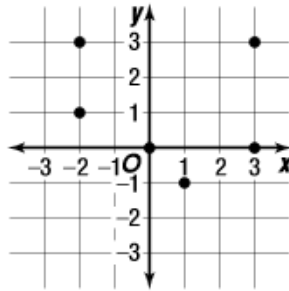
Choose 4 from the following to complete:

1)



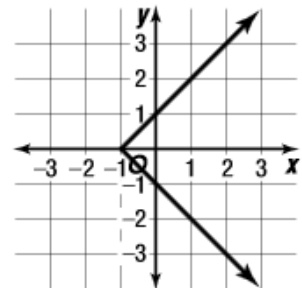
D:
R:

2)



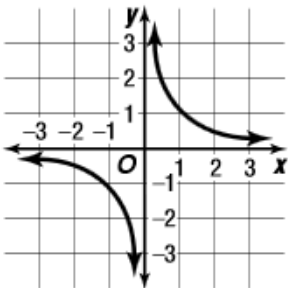
D:
R:

3)



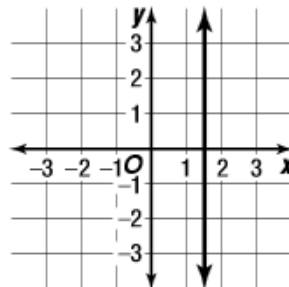
D:
R:

4)



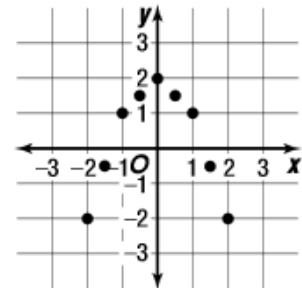
D:
R:

5)



D:
R:

6)



D:
R:

Choose 2 of the following to complete:

7) $\{(2,4), (3,5), (4,6), (5,8)\}$

D:
R:

8) $\{(1,4), (2,3), (3, -6), (-3,6)\}$

D:
R:

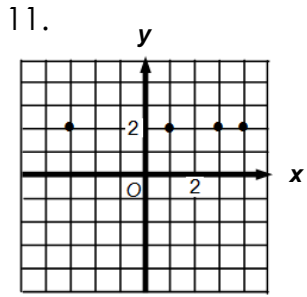
9) $\{(1,5), (1,7), (1, -5), (1,7)\}$

D:
R:

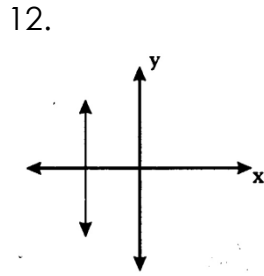
10) $\{(0,4), (1,4), (2,4), (3,4)\}$

D:
R:

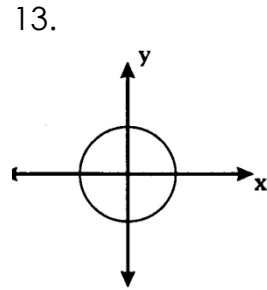
Choose 9 of the following to do



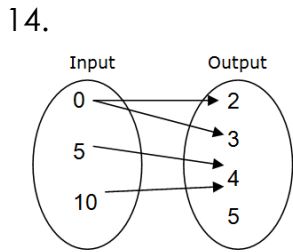
D:
R:



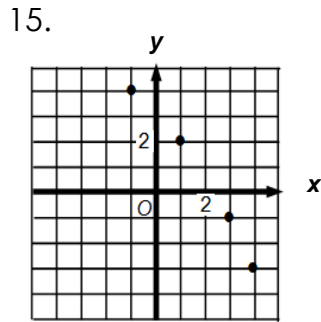
D:
R:



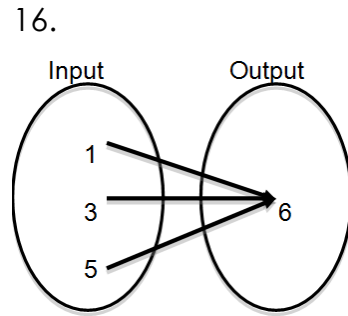
D:
R:



D:
R:



D:
R:

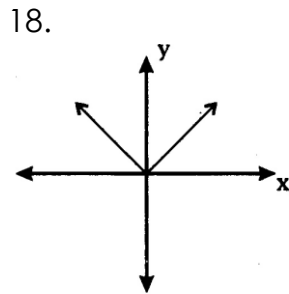


D:
R:

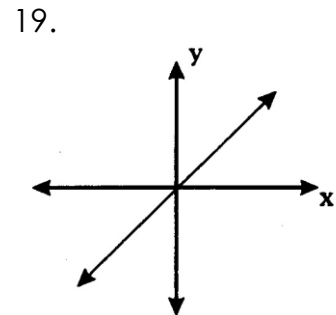
17.

x	-1	2	5
y	-4	8	20

D:
R:
20.



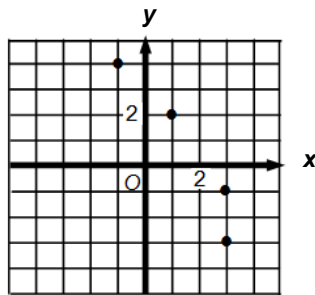
D:
R:
22.



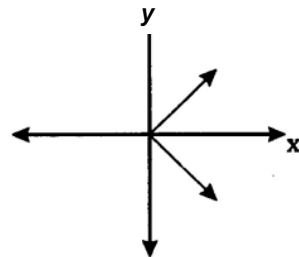
D:
R:
23.

$\{-1, 5\}, (2, 5), (3, 5), (8, 5)\}$

D:
R:



D:
R:



D:
R: