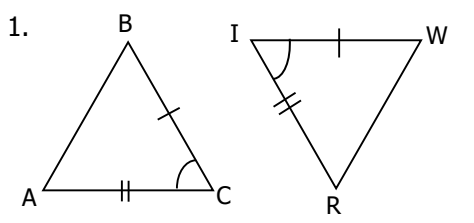


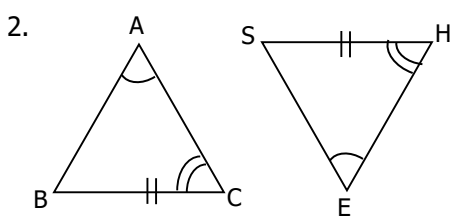
Secondary Math 1 (9th grade)
16.1 Triangle Congruence

Name: _____
 Due Date: _____ Period: _____

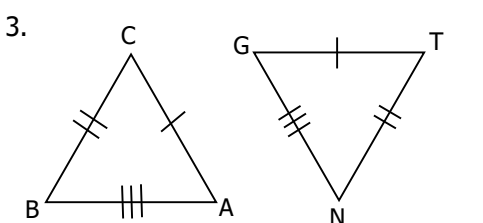
For each problem give the correct naming order of the congruent triangles. Write that name in order on the lines for the problem number (see box at bottom).



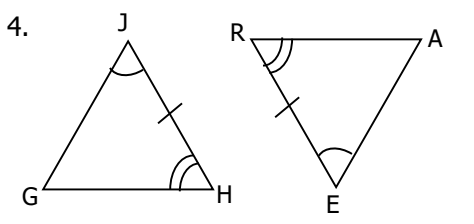
$\triangle ABC \cong \triangle$ _____



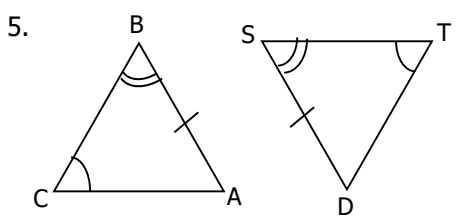
$\triangle ABC \cong \triangle$ _____



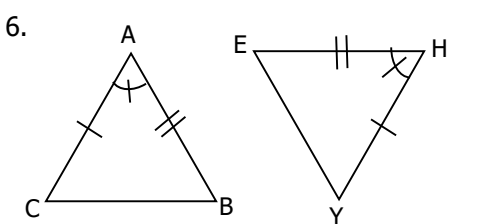
$\triangle ABC \cong \triangle$ _____



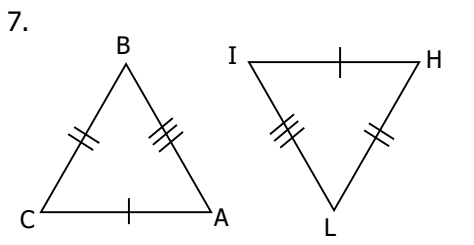
$\triangle GHJ \cong \triangle$ _____



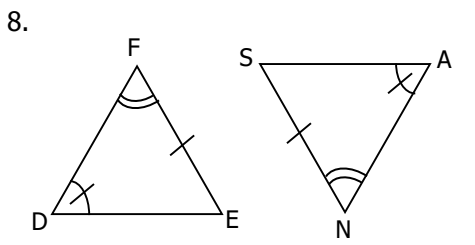
$\triangle ABC \cong \triangle$ _____



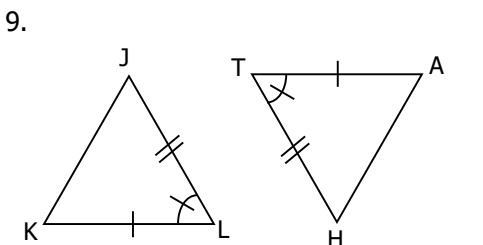
$\triangle ABC \cong \triangle$ _____



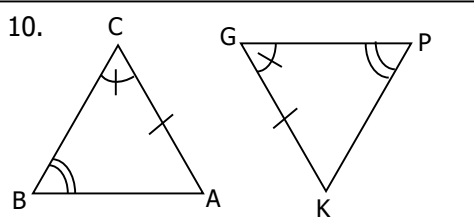
$\triangle ABC \cong \triangle$ _____



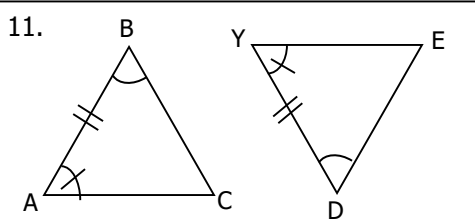
$\triangle DEF \cong \triangle$ _____



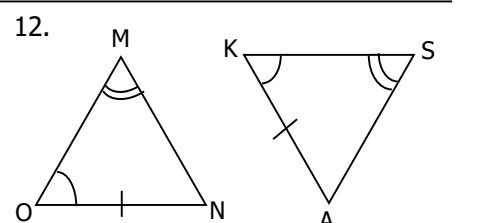
$\triangle JKL \cong \triangle$ _____



$\triangle ABC \cong \triangle$ _____



$\triangle ABC \cong \triangle$ _____



$\triangle MNO \cong \triangle$ _____

| | | | | | | | | | | | | | | | | | | | | | | | | | |
|--|---|---|----|---|---|----|----|----|---|----|----|---|---|---|---|---|---|---|---|---|---|----|----|---|----|
| | 4 | 4 | 4 | 8 | 8 | O | 8 | 12 | N | 12 | 12 | 2 | S | 2 | 2 | E | 5 | I | 5 | 5 | 9 | 9 | 9 | T | 6 |
| | 6 | 6 | 10 | E | E | 10 | 10 | 1 | O | 1 | 1 | N | 3 | U | 3 | 3 | 7 | 7 | T | 7 | E | 11 | 11 | I | 11 |