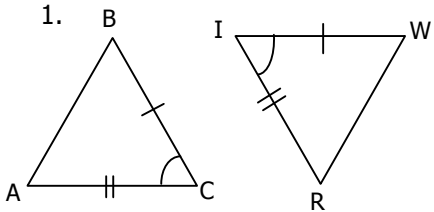


Secondary Math 1 (9th grade)
14.1 Triangle Congruence

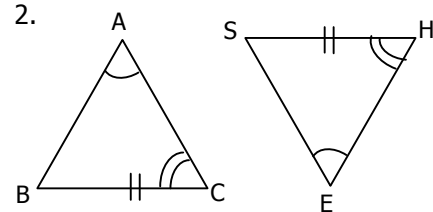
Name: _____

Date: _____ Period: _____

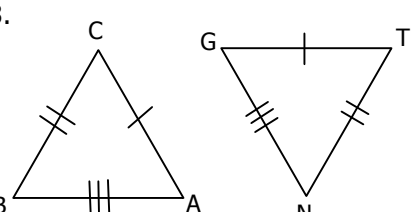
For each problem give the correct naming order of the congruent triangles. Write that name in order on the lines for the problem number (see box at bottom).

1. 

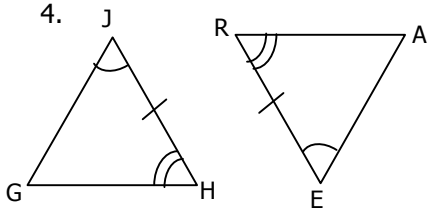
$\triangle ABC \cong \triangle$ _____

2. 

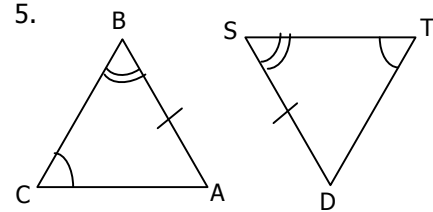
$\triangle ABC \cong \triangle$ _____

3. 

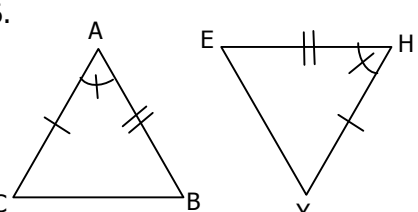
$\triangle ABC \cong \triangle$ _____

4. 

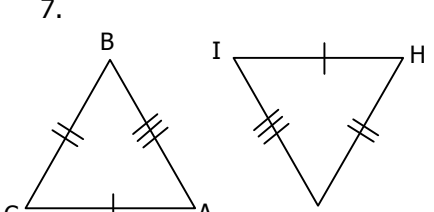
$\triangle GHJ \cong \triangle$ _____

5. 

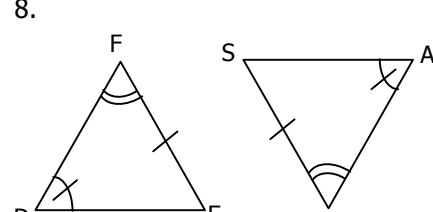
$\triangle ABC \cong \triangle$ _____

6. 

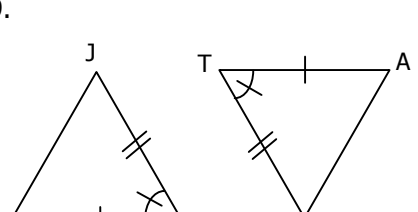
$\triangle ABC \cong \triangle$ _____

7. 

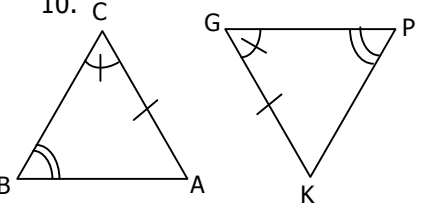
$\triangle ABC \cong \triangle$ _____

8. 

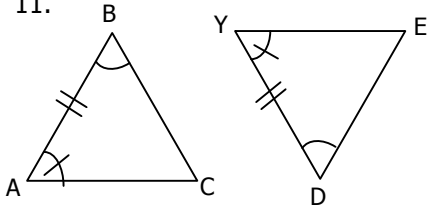
$\triangle DEF \cong \triangle$ _____

9. 

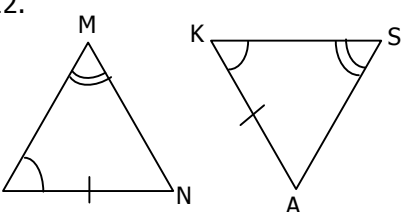
$\triangle JKL \cong \triangle$ _____

10. 

$\triangle ABC \cong \triangle$ _____

11. 

$\triangle ABC \cong \triangle$ _____

12. 

$\triangle MNO \cong \triangle$ _____

_____ O _____ S _____ E _____ I _____ T _____
 4 4 4 8 8 _____ 8 12 _____ 12 12 2 _____ 2 2 _____ 5 _____ 5 5 9 9 9 _____ 6
 _____ E E _____ O _____ N _____ U _____ T _____ E _____ I _____

6 6 10

10 10 1

1 1

3

3 3 7 7

7

11 11

11